

# Online Application

**This is not the Gert Johan Coetzee Bursary Application – [click here for the bursary](#)**

Fulltime Course Application

Application open

This Application is not required for the Evening Part time courses, Saturday Part time courses, Correspondence Course or the Portable Skills Training Programmes.

Before applying for fulltime studies at NWSI International, please

- Download and read the [Course Prospectus](#) for the course you applying for.
- Click here to find out about our [Fee Structure.add LINK RENCHIA](#)
- Only once you are familiar with the [admission criteria](#), course content, class hours, subjects and fee structures, can you continue with this application process.
- Please complete the following application form and submit this online. Please ensure you complete the form in full before submitting.
- You can also [download](#) an application form for printing. Once the printed form is completed you can scan and email to [charles@nwsd.co.za](mailto:charles@nwsd.co.za)

If you have any queries regarding this application, please [contact us](#) telephonically on +27 18 462 5149 or email [Charles](#)

Once the application has been accepted by NWSI, the student &/or parent will be notified telephonically and by email. The Registration Contract and Student Number will only be issued once the registration fee has been paid.

---

## Part 1 - Student Details

First Name

Surname

Nationality – Country of Origin

Cellphone Number

Home Telephone Number

Your Email

Address

Province

Country

---

## Education

Last School Attended

Year

Highest Grade Passed

Currently in Grade 12?

Have you completed any Tertiary Education?

Do you have any working experience?

Company

Do you suffer from any disability?

If yes, please state the nature of your disability

Marital Status

Do you have children?

---

## **Courses**

Please select the course your applying for

Please select the year you would like to start to study

---

## **Marketing**

How did you hear of NWSA?

Have you joined our Facebook Page?

Would you require assistance in finding accommodation in Klerksdorp?

---

## **Parent | Guardian**

Name & Surname of Parent

Relationship to student

Cellphone Number

Home Number

Email

---


## **Part 2 - Preliminary Entrance Exam**

- Applicants have to obtain a score of 75% for this Online Application Test in order to complete the full application test.
- The Offline Application Test will be emailed to the application for completion.
- You have to answer all the questions in the examination.
- Read each question thoroughly, before answering.
- You are permitted to use a calculator
- 10 mm = 1 cm, 20 mm = 2 cm and so forth.
- If ½ means divide by two, then 1/5th means divide by five, then 2/5th means divide by 5 and multiply by 2.
- Relax, enjoy and good luck!

### Question 1

To succeed in the fashion industry, you must be able to recognize and predict trends. Otherwise, you risk creating or retailing designs that are not accepted by your target market. Look at these images. Which one of these images is **NOT** a peak trend for the 2017/18 Summer Fashion Season?

A



B



C




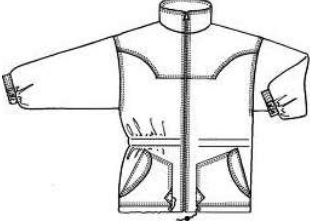




Select 1

- A  B  C  D

## Question 2




Match the following style name to its illustration. Please note that more options are given than what is required. Add the symbol (A/B/C) in the box underneath the illustrations that describes the style name

A - Parka Jacket	B - Bikini	C - Empire Style Dress	D - Tuxedo Jacket
F - Princess Style Dress	G - Mermaid Dress	H - Mono-kini	I - Ball Gown
J - Bra	K - Waistcoat	L - Corset	M - Fishtail Dress
N - Bootleg Trousers	O - Straight Cut Trousers		
 <p>1 <input type="text"/></p>	 <p>2 <input type="text"/></p>	 <p>3 <input type="text"/></p>	 <p>4 <input type="text"/></p>
 <p>5 <input type="text"/></p>	 <p>6 <input type="text"/></p>		

### Question 3

Match the following silhouette with the illustrations. Please note that more options are given than what is required

Add the symbol (A/B/C) in the box underneath the illustration that describes the silhouette.

A – A line Silhoutte	B – Hourglass Silhoutte	C – Mermaid Silhoutte
 1 <input data-bbox="331 801 432 857" type="text"/>	 2 <input data-bbox="815 808 916 864" type="text"/>	 3 <input data-bbox="1294 801 1394 857" type="text"/>

### Question 4

4.1 Name three international designers that regularly dress Hollywood celebrities for the red carpet

4.2 Name two South African designers that frequently dress SA celebrities for red carpet events

4.3 Name two fashion magazines

4.4 Name two Fashion Capitals of the world

---

### Question 5

Answer the following mathematical calculations

A  $\frac{3}{5}$  of 100

B  $\frac{1}{2}$  of 100

C Missing number in the sequence: 5.1mm 5.3mm \_\_\_\_\_ 5.7mm

D 94cm less  $\frac{1}{10}$ th of 20cm

E  $\frac{1}{2}$  of a bust that measures 94 cm

